

**AUSTRALIAN MATHEMATICS COMPETITION  
WARM-UP PAPER  
JUNIOR 7**

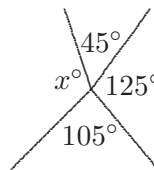
©2009 Australian Mathematics Trust

**Questions 1 - 4, 3 marks each**

1.  $\frac{1}{2}$  of  $\frac{1}{3}$  equals

- (A)  $\frac{1}{2}$                       (B)  $\frac{1}{5}$                       (C)  $\frac{3}{2}$                       (D)  $\frac{1}{6}$                       (E)  $\frac{2}{5}$

2. In the diagram,  $x$  equals




- (A) 75                      (B) 80                      (C) 85                      (D) 90                      (E) 95

3. A bicycle is advertised for sale at \$249 cash or 4 monthly repayments of \$65. By paying cash, the amount, in dollars, you would save is

- (A) 11                      (B) 21                      (C) 31                      (D) 111                      (E) 184

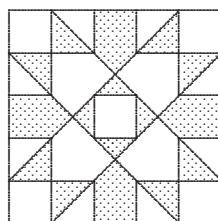
4. Each circle has an area of  $1 \text{ cm}^2$ . The area of the overlap between any pair of intersecting circles is  $\frac{1}{8} \text{ cm}^2$ . The total area in square centimetres of the region enclosed by the five circles is



- (A) 4                      (B)  $4\frac{1}{2}$                       (C)  $4\frac{3}{8}$                       (D)  $4\frac{7}{8}$                       (E)  $4\frac{3}{4}$

Questions 5 - 8, 4 marks each

5. If a rectangle has a perimeter of 24 cm and one side is twice as long as another, its area, in square centimetres, is
- (A) 24                      (B) 16                      (C) 20                      (D) 12                      (E) 32
6. A one litre carton of milk has a square base of size 7 cm by 7 cm and vertical sides. The depth of milk, in centimetres, is closest to
- (A) 18                      (B) 20                      (C) 22                      (D) 24                      (E) 26
7. Ten students sit for an exam which has a maximum score of 100. The average of the ten scores achieved by the students in the exam was 92. What is the minimum mark a student could have scored?
- (A) 20                      (B) 90                      (C) 92                      (D) 40                      (E) 0
8. The traditional patchwork motif (illustrated) is composed of squares and right-angled isosceles triangles.



The shaded part, expressed as a decimal fraction of the whole is

- (A) 0.36                      (B) 0.4                      (C) 0.45                      (D) 0.48                      (E) 0.5

Questions 9 - 10, 5 marks each

9. An orchardist in Mildura packed oranges into small bags of 8 and large bags of 20. 560 oranges were packed into 46 bags altogether. The number of large bags used was between
- (A) 10 and 14    (B) 14 and 18    (C) 18 and 24    (D) 24 and 30    (E) 30 and 34

